

Place value










Let's practise:

Tag us online:







#numberday

1. a) How many animals are in each group?










group 1

group 2

group 3

- b) The smallest group is group
- c) The greatest group is group
- d) There are more dogs than
- e) There are sheep than horses.

2. Write the numbers from smallest to greatest?

a) 4, 1, 3 , ,

b) 10, 9, 6 , ,

c) 0, 5, 4 , ,

Place value



3. Write the numbers from greatest to smallest?


a) 7, 8, 4

--	--	--


b) 3, 6, 10

--	--	--

4. Circle the number three?

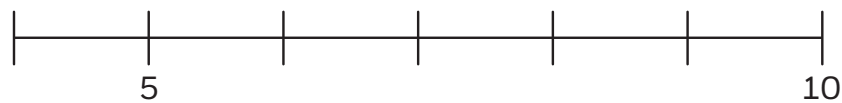


5. Circle 1 more than 6

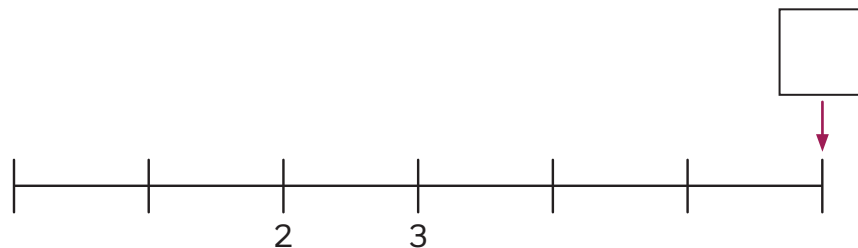


7. Here is part of a number line.

Complete the number line.




6. What number is the arrow pointing to?



Place value



Real world maths



Using paper and string make your own number line.
Hide some of the numbers.
See if someone at home can guess what you have hidden.

Which number is missing? How do you know?



Think it out

Roll 3 dice.



Put the dice in order from smallest to greatest.

Roll 3 dice again.



Put the dice in order from greatest to smallest.

How do you know which is the greatest?
How do you know which is the smallest?



How did you find these questions?

