

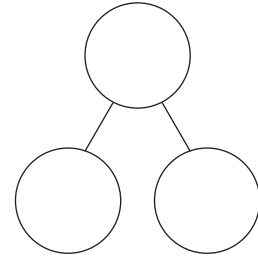
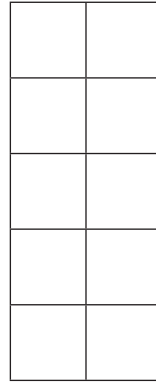

# Adding animals

## PUPIL WORKSHEET

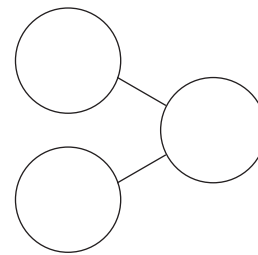
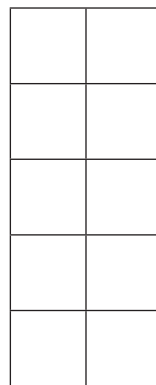

### Activity:

Tia is visiting a farm on a school trip. She is visiting 3 fields to count the animals. Can you count the animals?

1. Use Numicon pieces to find the total.
2. Colour squares in the 10-frame to show the parts.
3. Complete the part-whole model.
4. Write the adding sentence.



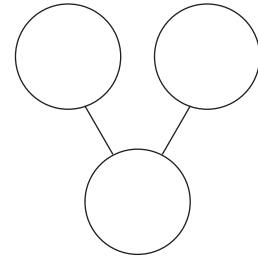
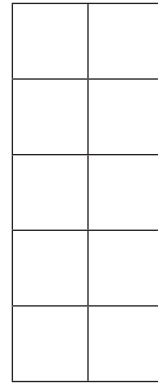

$$\square + \square = \square$$



$$\square + \square = \square$$

# Adding animals

PUPIL WORKSHEET



$$\square + \square = \square$$

## Extension activity:



1. What stories can you make from the picture?
2. Can you turn these into adding sentences?
3. How many of the key words can you use in your story?

**Key words:** total | part | whole | add | together | equals | pattern | count

# Adding animals

TEACHER NOTES



## Answers:


$$\boxed{3} + \boxed{3} = \boxed{6}$$


$$\boxed{3} + \boxed{6} = \boxed{9}$$


$$\boxed{4} + \boxed{5} = \boxed{9}$$