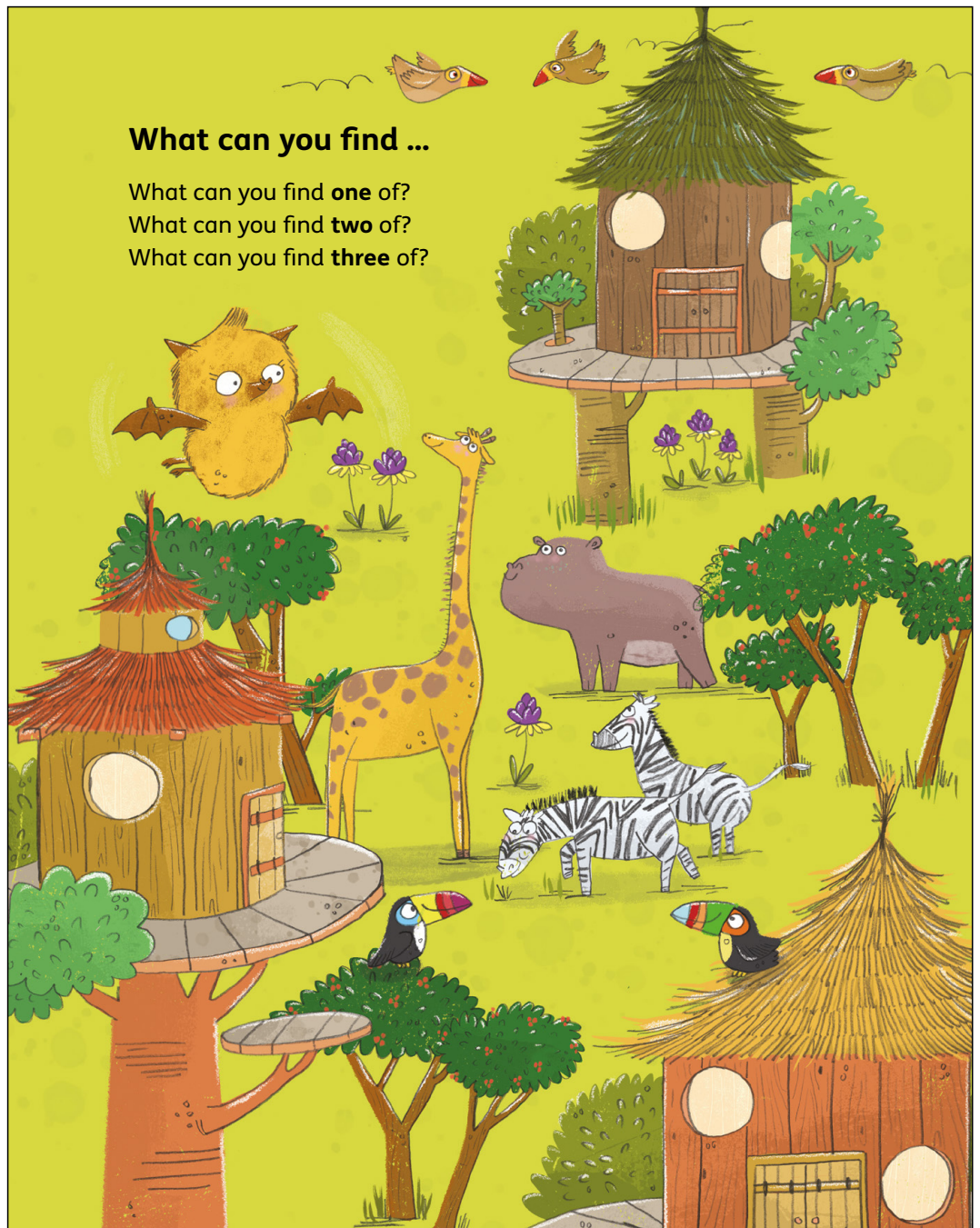


## WILD BUDDIES

The Wild Buddies are warm-hearted African animal characters who solve problems and help each other.

*Banana Breakfast* is a story about Meg the bat making breakfast for her friends. It is also about finding one, two, and three.

Can you find one, two, and three?



## WILD BUDDIES

The Wild Buddies are warm-hearted African animal characters who solve problems and help each other.

*Dance Party* is a story about the animal friends making pairs to go to a dance party.

Can you find the groups of animals?


### Dance party

Find each **group** of animals in the picture: hippos, zebras, hyenas, flamingos, and baboons.

How many animals are in each **group**?

Which **groups** have an **odd number** of animals?

Which **groups** have an **even number** of animals?





## MAKE IT MONSTER


*Make it Monster* is a series of stories about lovable monster friends Ralf, Scooter, Netty and Cora, who help each other out of tricky situations and create wacky inventions along the way.

*Ralf Moves In* introduces us to the monsters on Ralf's moving in day. It is also about fewer, more, the same, less than, greater than and equal to.


Can you find the same number, more and fewer glasses, plates, mugs, and bowls?

### Help Ralf unpack!

What is there the **same number** of? Are there **more** glasses or plates?  
Are there **fewer** mugs or bowls?



2 is **equal** to 2



4 is **equal** to 4



## DRAGONS OF MOON TAIL ISLAND

Siblings Nadia and Omar befriend Ember, a dragon from Moon Tail Island, in a series of *Dragons of Moon Tail Island* adventures in their hometown and on the dragons' island.

*Crash Landing* is a story about Nadia meeting Ember for the first time, and is about counting to 100 by making 10s.

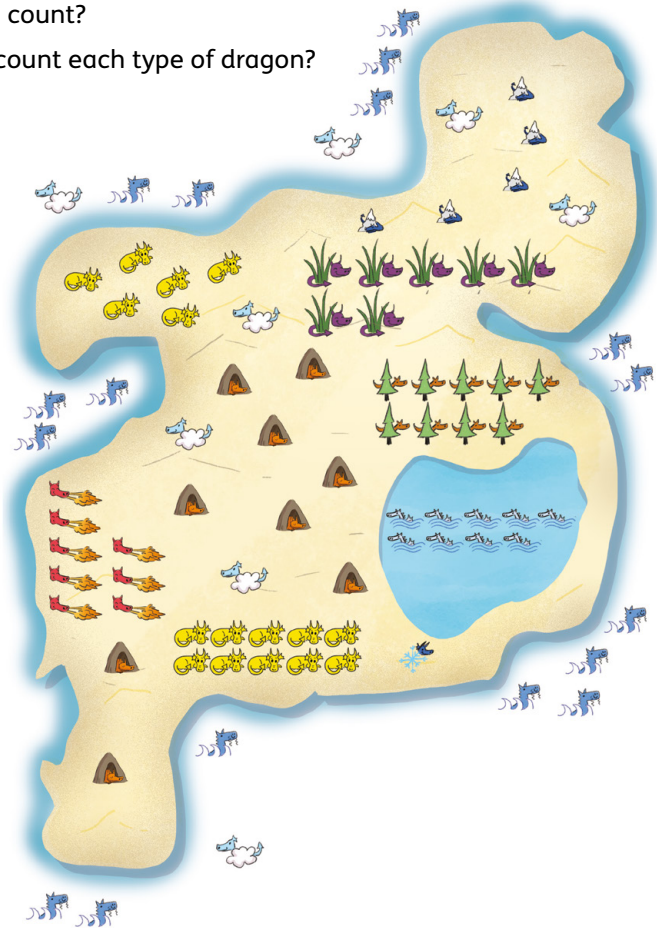
Can you count the dragons on the map?

### Count the dragons of Moon Tail Island

1. How many cave dragons are there?
2. How many fire dragons are there?
3. Count the other types of dragon. Which were the easiest to count?
4. How did you count each type of dragon?

**Key**

- Cave dragons
- Cloud dragons
- Field dragons
- Fire dragons
- Forest dragons
- Ice dragons
- Lake dragons
- Mountain dragons
- Sand dragons
- Sea dragons



## Answers

### BANANA BREAKFAST

There is 1 ... bat, hippo, giraffe, purple flower

There are 2 ... zebras, toucans (birds), windows on each house, purple flowers

There are 3 ... oxpeckers (birds), houses, purple flowers

You might find other things to talk about including the trees and houses.

### DANCE PARTY

There are 2 hippos, 3 zebras, 4 hyenas, 8 flamingos, and 5 baboons.

There is an odd number of zebras and baboons.

There is an even number of hippos, hyenas, and flamingos.

### RALF MOVES IN

~~There is the same number of mugs and glasses, and the same number of plates and bowls.~~

~~There are more plates than glasses.~~

~~There are fewer mugs than bowls.~~

### CRASH LANDING

1. ~~There are 9 cave dragons.~~

2. ~~There are 8 fire dragons.~~

3. ~~8 cloud dragons, 7 field dragons, 9 forest dragons, 1 ice dragon, 9 lake dragons, 5 mountain dragons, 16 sand dragons, and 17 sea dragons. You might have found the dragon arrays easier to count.~~

4. ~~You might have counted in ones when dragons were all over the place and in tens and ones for the sand dragons.~~